

Maths: KS2

Roman Time


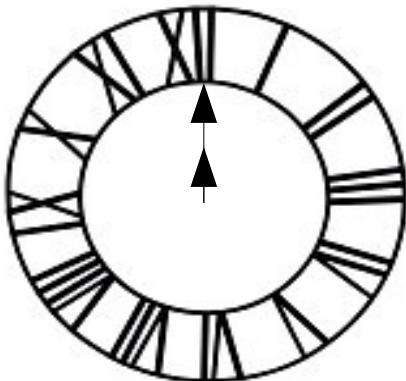




Using Roman Numerals to tell the time

The clock on the front of the chapel building tells the time using Roman Numerals. Can you write the numbers underneath the numerals to help you tell the time on the clock faces?

I	II	III	IV	V	VI	VII	VIII	IX	X	XI	XII

What time is shown on these clocks? Write your answers underneath the clock.



Write these times on the clockfaces below:

1. 8:30
2. 12.15
3. 1.20
4. 5.45

5. Eleven o'clock
6. Five minutes past nine
7. Twenty five minutes past six
8. Quarter to seven

